

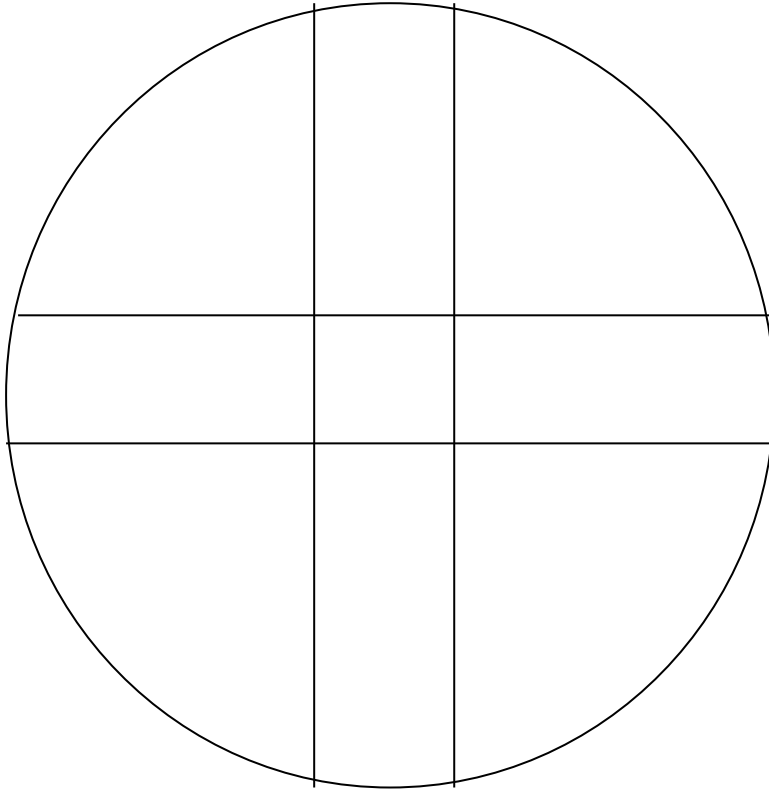
# The Bronze Age Summary

Name

Date

Class

Complete the decoration on this sundisc



What technique was used? \_\_\_\_\_

Describe this technique

---

---

On what Bronze Age Collar would you find this decorative pattern?

---

What technique was used? \_\_\_\_\_

Ms Mc Corrison

Describe this technique

---

---


Draw the collar you have in mind



Torcs were made by twisting gold into spirals. Name the 3 types of torcs

---

Draw one of  
them



Give an example of a metal object that was practical rather than ornamental

\_\_\_\_\_

What type of metal is bronze? \_\_\_\_\_

Name 2 items made from bronze

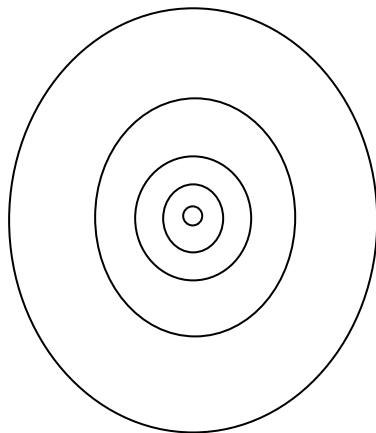
\_\_\_\_\_

\_\_\_\_\_

What material was used mainly in jewellery making? \_\_\_\_\_

What neck ornament is being described here "Made of a thin sheet of gold, the decoration was punched in on the front making geometric patterns of chevrons and triangles" \_\_\_\_\_

This pattern of concentric circles is found on many Bronze Age ornaments.  
Name three pieces which have such decoration.



\_\_\_\_\_

\_\_\_\_\_

\_\_\_\_\_

As metal replaced stone, work patterns changed from group involvement to that of the individual craftsman. Explain.

\_\_\_\_\_

\_\_\_\_\_

\_\_\_\_\_

What metals were found in Ireland and where?

---

---

---

What is another word for a fibula? \_\_\_\_\_

What designs were found on large, highly decorated and unpractical Clones Fibula? \_\_\_\_\_

---

The torc, the gorget and the lunala are all Bronze Age collars or neck ornaments. In what way do they differ from each other?

---

---

---

---

---

---

---

---

Explain the construction and form of the Glenisheen Gorget

---

---

---

---

---


---

What are the important dates in the Bronze Age? \_\_\_\_\_

---

Ms Mc Corrison

Label this pair of lock rings



What artefact is believed to have served as an amulet or an object to ward off evil or ensure fertility? \_\_\_\_\_

Draw this object to scale