




A) Answer the questions

1) What do the following symbols on the map mean?


	_____
	_____
	_____
	_____

2) At what number on the walk will you find the following:


- a) The Round Tower _____
- b) St. Declan's Well _____
- c) The Shipwreck _____
- d) The Lookout Post _____

3) Which two historic buildings are next to each other on the map?


B) Design your own map symbols for the tourist activities below.




Skateboard Park



Playground



Castle



Surfing

C) Design a tourist map for your local area or town. Use google maps or your atlas to get a map of the area and mark some of the interesting things there are to do there. You can mark the map with numbers or make up your own symbols.