



A) Use the map to answer the questions


- 1) What colour is the Butler trail route on the map? _____
- 2) What building is marked by number 1 on the map and what town is it in?
 - a. Building: _____
 - b. Town: _____
- 3) What number is each of these buildings on the map and what town are they in?
 - a. **Cahir Castle** - Number: _____ Town: _____
 - b. **Main Guard** - Number: _____ Town: _____
 - c. **Swiss Cottage** - Number: _____ Town: _____
- 4) Look at the map symbols. Which of these activities can you also do in Clonmel? (✓ or ✗)
 - a. Fishing ☐
 - b. Golf ☐
 - c. Surfing ☐
- 5) If you drove from Carrick-on-Suir to Cahir (via Clonmel) how many km would it be? _____
- 6) Draw the symbols from the map for each of the following:



Gardens



Visitor Information




Fishing


Teacher Answers.

Note: Butler Trail map is also available online at:
<http://www.tipperary.com/sites/default/files/Butler%20Trail%20Brochure.pdf>


- 1) What colour is the Butler trail route on the map? _____ **Red** _____
- 2) What building is marked by number 1 on the map and what town is it in?
 - a. Building: _____ **Ormond Castle** _____
 - b. Town: _____ **Carrick on Suir** _____
- 3) What number is each of these buildings on the map and what town are they in?
 - a. **Cahir Castle** - Number: 4 Town: _____ **Cahir** _____
 - b. **Main Guard** - Number: 3 Town: _____ **Clonmel** _____
 - c. **Swiss Cottage** - Number: 5 Town: _____ **Cahir** _____
- 4) Look at the map symbols. Which of these activities can you also do in Clonmel? (✓ or ✗)
 - a. Fishing ✓
 - b. Golf ✓
 - c. Surfing ✗
- 5) If you drove from Carrick-on-Suir to Cahir (via Clonmel) how many km would it be? **39km**
- 6) Draw the symbols from the map for each of the following: **Teacher Check**



Gardens



Visitor Information



Fishing